



Ganga Education Society's

SHRADDHA OLYMPIAD QUEST

In pursuit of excellence...

CLASS

3

DO NOT OPEN THIS BOOKLET UNTIL ASKED TO DO SO

Total Questions : 50 ■ Time : 1 hr.

Name :

SOQ Roll No. : Contact No.:

Guidelines for the Candidate

1. You will get additional 10 minutes to fill up information about yourself on the OMR sheet before the start of the exam.
2. Write your **Name, Class & Roll Number** clearly on the **OMR sheet** and do not forget to sign it. We will share your marks / result and other information related to SOQ exams on your mobile number.
3. The question paper comprises three sections:
Section - 1 : General Science (20Q). **Section - 2** : EVS & Space Science (20Q.)
Section - 3 : Achiever's Section (10Q.)
4. All questions are compulsory. There is no negative marking. Use of calculator is not permitted.
5. There is only ONE correct answer. Choose only one option for an answer.
6. To mark your choice of answer by darkening the circle on the OMR sheet, use **black ball point pen** only.

E.g.

Q.16. In the water cycle condensation is the process of

- A. Water vapour cooling down and turning into liquid B. Ice warming up and turning into a liquid
C. Liquid cooling down and turning into ice D. Liquid warming up and turning into water vapour


As the correct answer is option A, you must darken the circle corresponding to option A on the OMR sheet as shown in the figure





16. ● ○ ○ ○

7. Rough work should be done in the blank space provided in the booklet
8. Return the OMR sheet to the invigilator at the end of the exam.

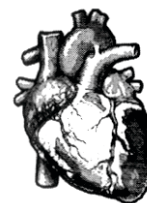
SECTION - I - GENERAL SCIENCE

- 1) I am a non-living thing.
 A) Mango tree B) Cow C) Chair D) None of these
- 2) New plants grow from _____.
 A) seeds B) eggs C) rocks D) None of these
- 3) Which of the following is **NOT** a correct match?
 A) Robbit – Gnaw B) Snake – Swallow
 C) Frog – Lap D) Cow – Chew
- 4) Milk producing animals are _____.
 A) lions and tigers B) horses and mules
 C) cows and goats D) None of these
- 5) The part of the plant which grows below the ground is called the _____.
 A) stem B) flower C) root D) None of these
- 6) Which of the following beaks belong to the bird shown in the given picture?



- | | |
|--|--|
| A)  | B)  |
| C)  | D)  |

- 7) Birds that have two front and two back toes are _____.
 A) scratching birds B) wading birds
 C) climbing birds D) None of these
- 8) Find the **INCORRECT** statement regarding this organ X.
 A) It has muscles in its wall.
 B) It is a part of the circulatory system.
 C) It beats.
 D) It throws out impure air



X

Space for rough work.

15) Which of the following animals shows same type of movement as the animal shown in the given figure?



16) Animals need food _____

- A) to grow B) to stay healthy C) Both A and B D) None of these


17) Mushrooms are unable to make their own food because they do not have ____

- A) chlorophyll B) spiracles C) carbon dioxide D) None of these

18) _____ absorbs water and minerals from the soil.

- A) Leaf B) Stem C) Root D) None of these


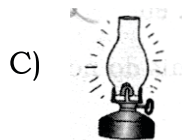
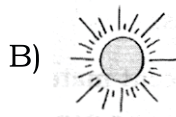

19) Which of these birds builds nest on the ground with pebbles and stones?



20) Birds can fly easily because they have _____


- A) streamlined body B) heavy bones
 C) beaks and claws D) None of these

21) Which of the following is the main source of light on the Earth?



 Space for rough work.


- 22) Shadow will appear shortest at _____
 A) noon B) morning C) evening D) None of these
- 23) Which sense organs are being used by the girl in the given image?
 A) Eyes, Tongue
 B) Ears, Eyes
 C) Nose, Eyes
 D) Tongue, Ears



- 24) Ribcage protects the _____
 A) heart B) lungs C) Both A and B D) None of these
- 25) The unit used for measuring temperature is degree _____
 A) Fahrenheit B) Celsius C) Either A or B D) None of these

SECTION - II - EVS AND SPACE SCIENCE

- 26) At school, you should _____
 A) follow the rules of the games B) climb on the desks
 C) run around the benches D) None of these
- 27) Which of the following children is obeying the safety rules?



- 28) Breaking down of rocks due to the action of the sun, wind and water is called _____
 A) weathering B) erosion C) flooding D) None of these
- 29) Water changes to _____ on boiling.
 A) ice B) water vapour C) cloud D) None of these

 Space for rough work.

- 30) A season is the period of many days during which the weather
 A) Changes every 15 days B) Changes every week
 C) Remains almost the same D) Changes every month
- 31) The third planet from the sun is _____
 A) Venus B) Earth C) Mars D) None of these
- 32) Planet Earth is often called the
 A) Blue planet B) Green planet C) Red planet D) Brown planet
- 33) After tying a bandage on a wound, we should keep the wounded part _____ the body level.
 A) below B) above C) equal to D) None of these
- 34) Do NOT touch _____ with wet hands.
 A) Soap B) Electrical switches C) Knife D) Toys
- 35) Flat topped mountains are particularly formed due to the action of _____
 A) water B) wind C) heat D) None of these
- 36) The days are long and nights are short in _____
 A) winter B) summer C) monsoon D) None of these
- 37) Drought occurs due to lack of _____ for a prolonged period of time.
 A) Rain B) Sunny days C) Snow D) Wind
- 38) Fill in the blanks with the correct option. Soil can be made more (1) by adding (2).
- | (1) | (2) |
|------------|------------------|
| A) Clayey | Water |
| B) Loamy | Sand particles |
| C) Fertile | Clayey particles |
| D) Fertile | Manure |
- 39) The phase of the moon when it is not visible on Earth is called _____
 A) new moon B) crescent moon C) gibbous moon D) None of these

Space for rough work.

40) Which of these is NOT a phase of the Moon?



SECTION - III - ACHIEVER'S

41) Study the given food chain and select the correct statements regarding it.

Grass (P) X (P) Sparrow (P) Snake

- 1) X is a prey 2) X is a herbivore 3) X is a plant 4) X is a producer
 A) 1 and 4 only B) 2 and 3 only C) 1 and 2 only D) 2 and 4 only

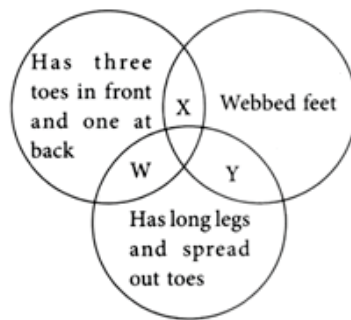
42) Refer to the given Venn diagram and select the correct option regarding it.

A) W is crane

B) X is owl

C) Y is ostrich

D) Both A and C



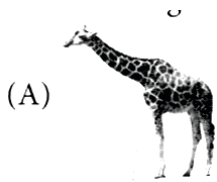
43) Refer to the given figures.



Which of the following statements is correct regarding the given figures?

 Space for rough work.

- A) Suman will be able to see candlelight as wood is an opaque object.
 B) Suman will not be able to see candlelight as light travels in a straight line.
 C) Suman will be able to see candlelight as light can bend along the edges of the wood.
 D) Suman will not be able to see candlelight as wood is a translucent object.
- 44) Select the odd one out on the basis of eating habit of the given animals.




- 45) Which of the following **CANNOT** be found in the given word grid?

- A) An organ that keeps the blood clean.
 B) An organ that pumps blood throughout the body.
 C) It helps the bone to move.
 C) Part of respiratory system.

N	M	B	B	F	E	X	W	V	A
S	U	L	R	M	J	T	I	G	M
K	T	O	N	G	U	E	N	H	U
I	D	O	O	V	Q	Y	D	X	S
N	F	D	S	K	W	E	P	O	C
E	L	Z	E	A	R	S	I	C	L
T	Y	I	L	D	A	N	P	U	E
F	S	G	K	I	D	N	E	Y	S
H	F	N	D	E	O	P	C	Q	X

Space for rough work.

46) Refer to the given set up. Which of the following options shows the shadow formed on the wall?



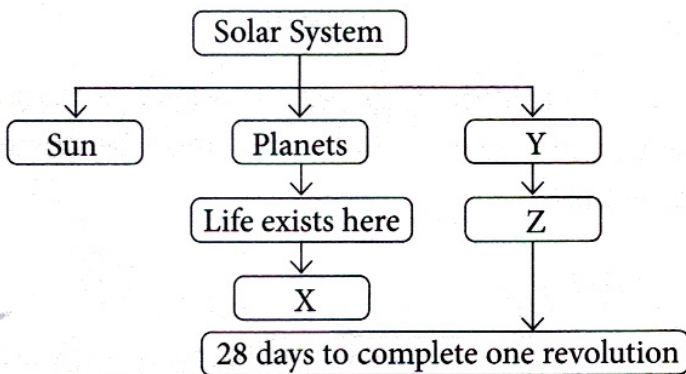
- A) B) C) D)

47) Identify the bird by looking at its beak X as shown in the given picture and select the option that shows the type of feet this bird has.



- (A) (B) (C) (D)

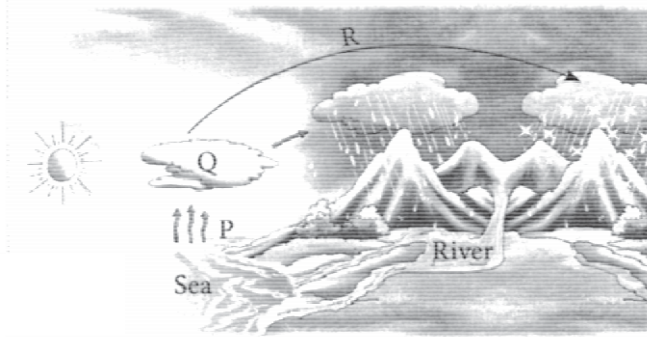
48) Study the given flow chart and identify X, Y and Z.



	X	Y	Z
A)	Moon	Natural satellite	Earth
B)	Earth	Natural satellite	Moon
C)	Earth	Man-made satellite	Moon
D)	Moon	Man-made satellite	Earth


Space for rough work.

- 49) Study the given figure and select the **INCORRECT** option regarding processes P, Q and R.



- A) P is a process that also helps in drying of wet clothes.
 B) R is the process that occurs during changing of solid into liquid.
 C) Q is the process involved in fogging up of eye glasses when you enter a warm room from a cold room.
 D) R is a process involved in changing of water into ice.
- 50) In the given box, how many food items can be grouped as protective food?

- A) 3
 B) 4
 C) 5
 D) 6



 Space for rough work.

Space for rough work.

Space for rough work.



SHRADDHA OLYMPIAD QUEST

MATHS

For Std. 3, 4, 5, 6, 7, 8, 9



SHRADDHA OLYMPIAD QUEST

SCIENCE

For Std. 3, 4, 5, 6, 7, 8, 9



SHRADDHA OLYMPIAD QUEST

ENGLISH

For Std. 3, 4, 5, 6, 7, 8, 9



SHRADDHA OLYMPIAD QUEST

MAT

For Std. 3, 4, 5, 6, 7, 8, 9



Ganga Education Society's

**SHRADDHA
OLYMPIAD QUEST**

In pursuit of excellence...

Near Jaydatt Tuffen Glass, Solage Mala, Ichalkaranji - 416115. ☎ 7970062700, 8070026700
www.shraddhaolympiadquest.com



CLASS : 3

SOQ EXAM

DATE : 25/02/2024

TIME : 1 Hr,

Subject : MATHS

MARKS : 100

Students Name : _____

SECTION – I

1) Rohit purchased 2 rolls of ribbons. One roll of ribbon is 9 m 13 cm long and the other roll of ribbon is 5 m 87 cm long. What is the total length of ribbons in cm?

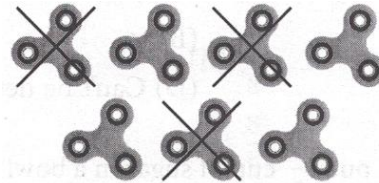
- A) 150 B) 1300 C) 1500 D) 1800

2) Convert 7045 g into kg and g.

- A) 7 kg B) 45 kg C) 7 kg 40 g D) 7 kg 45 g

3) Which of the following shows the fraction of crossed fidget?

- A) $\frac{7}{3}$ B) $\frac{5}{7}$



- C) $\frac{4}{7}$ D) $\frac{3}{7}$


4) Match the following.

- | | | | |
|------------------|---|---|----------------|
| (a) 1 hour | • | • | (p) 24 hours |
| (b) 1 quarter | • | • | (q) 30 minutes |
| (c) half an hour | • | • | (r) 45 minutes |
| (d) 1 day | • | • | (s) 60 minutes |
| (e) 3 quarters | • | • | (t) 15 minutes |

- A) PQRST B) STQPR C) PTQRS D) SPQTR

5) The time shown on the clock is _____ minutes to 7.

- A) 5
B) 40
C) 50
D) 10

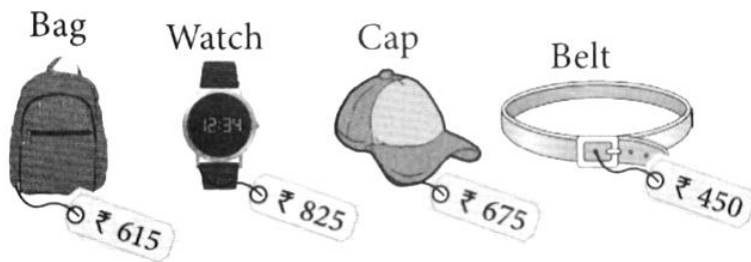


6) Write the number which comes in between.

2545 2547

- A) 2546 B) 2500 C) 4652 D) 6245

- 7) The difference between the place values of digit 8 in 1892 and 2785 is _____
 A) 800 B) 720 C) 80 D) 0
- 8) Hindu Arabic numeral for the Roman numerals.
 A) XXXIX B) XXVI C) XLIX D) L
 A) 39 B) 49 C) 59 D) 69
- 9) State True or False.
- (a) $2365 + 4321 = 4321 + 2365$
- (b) $4911 + 0 = 0$
- (c) $3899 + 1 = 3800$
- (d) $0 + 7081 = 7081$
- A) T T T F B) T F F T C) T F F F D) F F T T
- 10) Lippi had 5404 toys in her store. She bought 1588 toys in February. If she donated 1066 toys in March, then how many toys did she have in the end?
 A) 5926 B) 5929 C) 5920 D) 5900
- 11) There are 7 birds sitting on a branch. How many birds are there on 4 such branches?
 A) 28 B) 35 C) 21 D) 7
- 12) Vikram went to a mall for shopping with ₹ 1275 and saw the following offer.



Which of the following offer he can take so that no amount is left with him?

- A) A watch and a bag B) A belt and a cap
 C) A bag and a cap D) A watch and a belt
- 13) In a cinema hall, there are 15 seats in each row. If there are 16 such rows, then how many seats are there in the hall?
 A) 230 B) 210 C) 240 D) 72
- 14) $14 \div 2 = ?$
 A) 7 B) 21 C) 35 D) 28

15) Complete the following table.

Division fact	Dividend	Divisor	Quotient
$28 \div 7 = 4$			

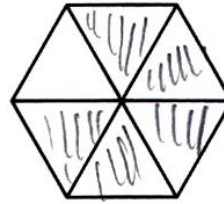
- A) 28, 7, 4 B) 18, 3, 6 C) 18, 2, 9 D) 32, 4, 8

16) Which of the following is a proper fraction?

- A) $\frac{17}{9}$ B) $\frac{3}{5}$ C) $\frac{12}{7}$ D) $\frac{11}{3}$

17) Number of shaded fraction to given figure.

- A) $\frac{1}{6}$ B) $\frac{6}{5}$
 C) $\frac{5}{6}$ D) 6



18) Rohit has to blow one third of total number of candles on the cake. Total number of candles on cake are 9. How many candles will Rohit blow?

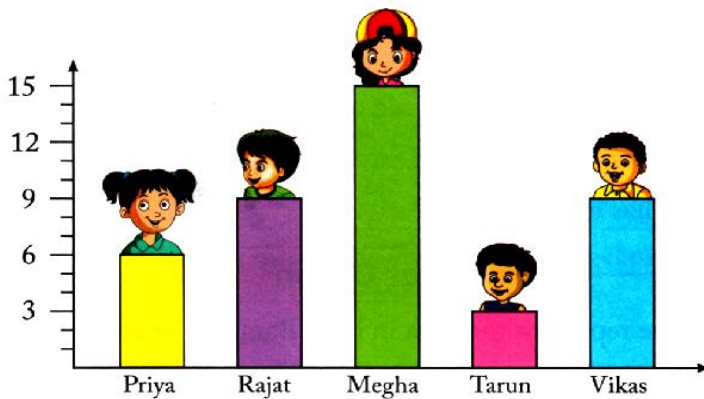
- A) 3 B) 6 C) 4 D) 9

19) Find the value of X.

- A) 4 B) 5
 C) 3 D) 2

$$\begin{array}{r}
 \text{m} \quad \text{cm} \\
 9 \quad 5 \quad 3 \\
 2 \quad 4 \quad 8 \quad 2 \\
 + 1 \quad 1 \quad 0 \quad 7 \\
 \hline
 4 \quad X \quad 4 \quad 2
 \end{array}$$

(Direction Q. No. 20 to 22) : Given below is the bar graph of number of pancakes eaten by five children. Study the bar graph and fill in the blank.



20) Priya ate _____ number of pancakes

- A) 3 B) 6 C) 4 D) 9

21) 12 more pancakes are eaten by Megha than _____.

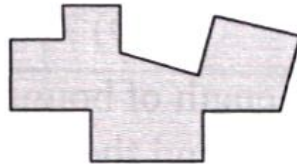
- A) Priya B) Rajat C) Vikas D) Tarun

- 22) Total number of pancakes eaten by Rajat, Tarun and Vikas is _____
 A) 6 B) 9 C) 3 D) 21
- 23) Convert ₹ 3.25 into paise.
 A) 325 B) 320 C) 352 D) 235
- 24) Subtract : ₹ 217.80 from ₹500
 A) 282 B) 282.10 C) 282.20 D) 280
- 25) A teacher collected ₹40.50 each from 9 students in the class. How much total amount has she collected?
 A) 364 B) 364.50 C) 364.20 D) 364.25


SECTION – II

- 26) Find the number of sides of the given figure.

- A) 15
 B) 10
 C) 14
 D) 18



- 27) Identify the types of lines and write answers with the help of clues.

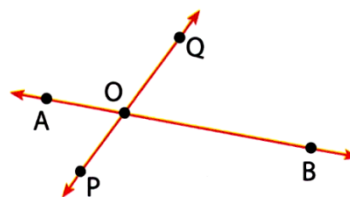


- A) Horizontal B) Slant C) Curved D) Vertical

- 28) Fill in the blanks

Point of intersection _____

- A) Q B) A
 C) O D) R



- 29) How many closed and open figures can you see?

Closed figures = _____

Open figures = _____

- A) 6, 6 B) 5, 7
 C) 3, 9 D) 10, 2



30) Name the highlighted part.

- A) Curved surface
- B) Vertex
- C) Edge
- D) Curved edge



31) Fill in the blanks.

Number of edges in a cuboid = _____

- A) 12
- B) 1
- C) 6
- D) 2

32) Read the clues carefully and identify the 3D – Shape.

I have no edges and vertices. Who am I?

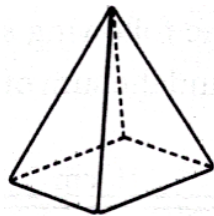
- A) Cube
- B) Cone
- C) Sphere
- D) Cylinder

33) Identify the picture which is symmetrical along the dotted line.



34) How many faces does the given figure have?

- A) 4
- B) 5
- C) 9
- D) 6



35) Write the next two numbers in each of the following patterns.

300, 250, 200, 150, _____, _____

- A) 50, 100
- B) 50, 44
- C) 100, 50
- D) 50, 0

36) Write the missing number in the patterns given below.

36, , 30, 27, 24, 21

- A) 33
- B) 35
- C) 34
- D) 30

37) Which of the following figures have 3 faces and 2 edges?



38) Complete the following pattern series.

500, 490, 480, 470, _____, _____

- A) 460, 410 B) 440, 450 C) 420, 440 D) 460, 450

(Direction Q. No. 39 & 40) : Read the clues carefully and identify the 3D-shape.

39) I have two flat faces and a curved surface.

- A) Cylinder B) Cuboid C) Cone D) Sphere

40) I have 6 faces and all my faces are same in shape and size. Who am I?

- A) Cylinder B) Cube C) Cone D) Ellipse cod

SECTION – III (ACHIEVERS)

41) Sidak has ₹950. She bought 2 dolls, 3 hen and a teddy bear. How much money will be left with her?

- A) ₹350
B) ₹440
C) ₹520
D) ₹660



$\frac{1}{3}$ of ₹ 360



$\frac{1}{2}$ of ₹ 160



$\frac{1}{4}$ of ₹ 480

42) If Mohit takes a leave on all odd number of days in July 20XX, then how many days did he work? (Assume that every Sunday is a holiday)





- A) 12
B) 13
C) 14
D) 15

July 20XX						
Mon	Tue	Wed	Thu	Fri	Sat	Sun
	1	2	3	4	5	6
7	8	9	10	11	12	13
14	15	16	17	18	19	20
21	22	23	24	25	26	27
28	29	30	31			

43) Guru Vashishtha has a class with 15 students. He is buying pizza for his class. He will have a total of 30 slices of pizza because each large pizza has 10 slices and he ordered 3. How many will each child get?

- A) 2 B) 4 C) 1 D) Not evaluated

44) Match the amount of money given in Column A with their total amount given in Column B.

	Column A	Column B
(p)		1) ₹2505
(q)		2) ₹ 210
(r)		3) ₹ 750
(s)		4) ₹ 460

A) (p) → (1); (q) → (2); (r) → (4); (s) → (3)

B) (p) → (3); (q) → (4); (r) → (1); (s) → (2)

C) (p) → (2); (q) → (4); (r) → (1); (s) → (3)

D) (p) → (3); (q) → (1); (r) → (2); (s) → (4)

45) State 'T' for true and 'F' for false and select the correct option.

a) There are 6 months in a year having 30 days.

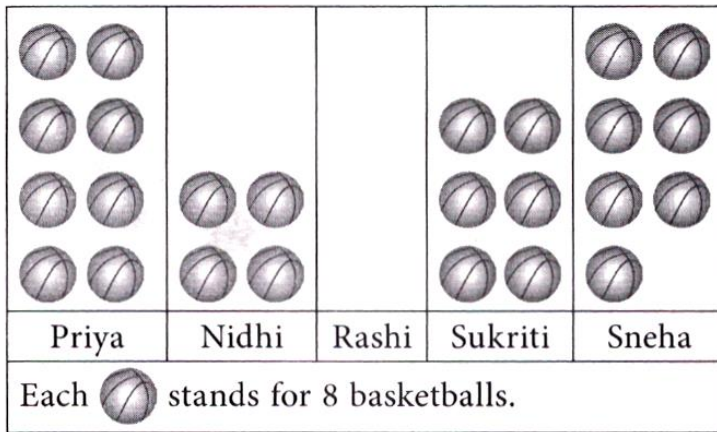
b) There are 4 months in a year having 31 days.

c) If day before yesterday was Tuesday, then today is Thursday.

d) 15 hours = 900 minutes.

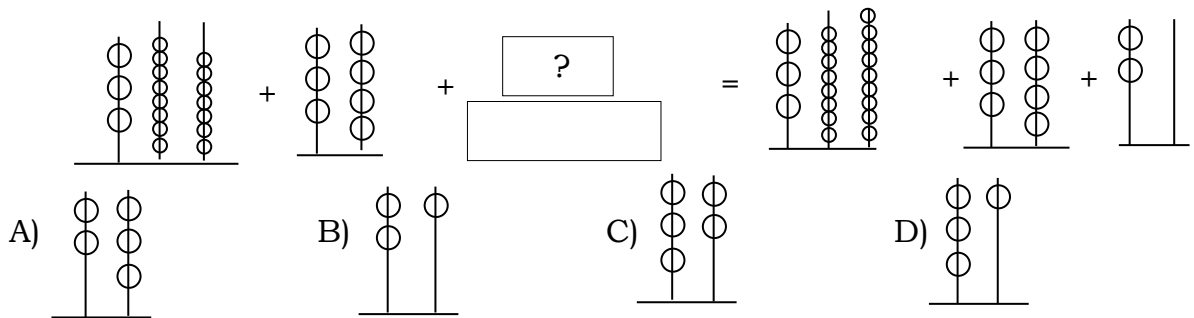
	(a)	(b)	(c)	(d)
A)	T	T	T	F
B)	T	F	F	T
C)	T	T	F	T
D)	F	F	T	T

- 46) The given picture graph shows the number of basketballs 5 girls have. Study it carefully and answer the following question.

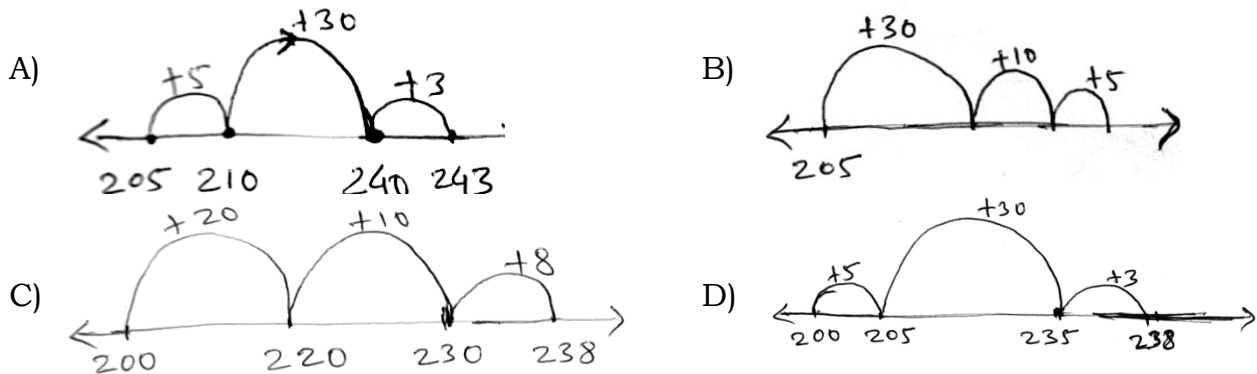


If there are total 240 basketballs, then Rashi has _____ basketballs.

- A) 45 B) 32 C) 40 D) 56
- 47) Fill the boxes for the given addition equation.




- 48) Select the ways in which $205 + 38$ can be represent on the number line.



- 49) The given clock shows the time when the movie starts.



The movie lasted for 3 hours 40 minutes. Which clock shows the time when movie ended?



50) The given graph shows the number of fruits sold by Aakash on Sunday.

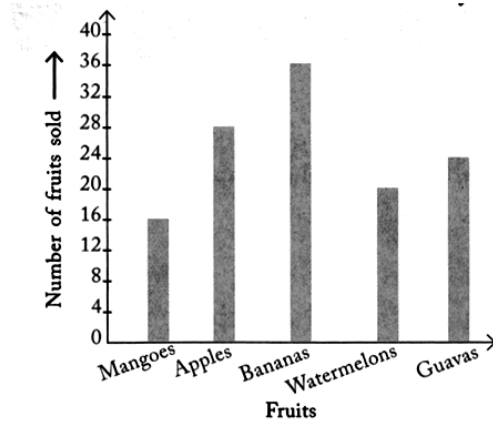
Aakash sold 48 apples and _____ together.

A) Mangoes

B) Guavas

C) Watermelons

D) Bananas





Ganga Education Society's

SHRADDHA OLYMPIAD QUEST

In pursuit of excellence...

CLASS

3

DO NOT OPEN THIS BOOKLET UNTIL ASKED TO DO SO

Total Questions : 50 ■ Time : 1 hr.

Name :

SOQ Roll No. : Contact No.:

Guidelines for the Candidate

1. You will get additional 10 minutes to fill up information about yourself on the OMR sheet before the start of the exam.
2. Write your **Name, Class & Roll Number** clearly on the **OMR sheet** and do not forget to sign it. We will share your marks / result and other information related to SOQ exams on your mobile number.
3. The question paper comprises three sections:
Section - 1 : Verbal (20 Q.) **Section - 2** : Non Verbal (20 Q.) **Section 3** : Achievers Section (10 Q.)
4. All questions are compulsory. There is no negative marking. Use of calculator is not permitted.
5. There is only ONE correct answer. Choose only one option for an answer.
6. To mark your choice of answer by darkening the circle on the OMR sheet, use **Black ball point pen** only.

E.g.

Q.16. In the water cycle condensation is the process of

- A. Water vapour cooling down and turning into liquid B. Ice warming up and turning into a liquid
C. Liquid cooling down and turning into ice D. Liquid warming up and turning into water vapour

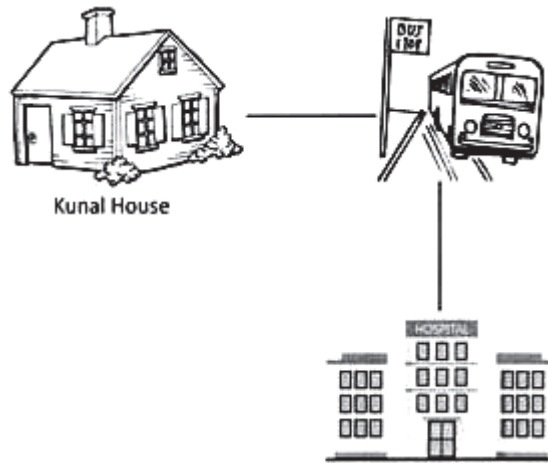
As the correct answer is option A, you must darken the circle corresponding to option A on the OMR sheet

as shown in the figure

16.	<input checked="" type="radio"/>	<input type="radio"/>	<input type="radio"/>	<input type="radio"/>
-----	----------------------------------	-----------------------	-----------------------	-----------------------

7. Rough work should be done in the blank space provided in the booklet
8. Return the OMR sheet to the invigilator at the end of the exam.

1). Look at the picture below and answer the question:



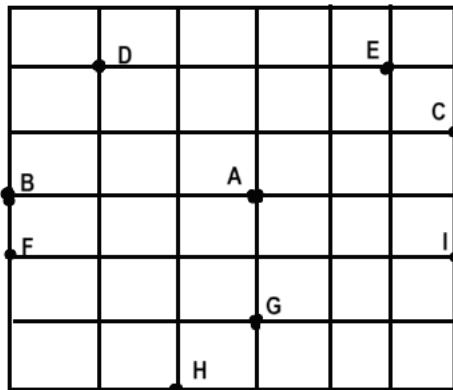
Kunal has to take _____ turn from bus stop to reach hospital.

- (A) Left (B) Right
 (C) Forward (D) Backward

2). If the day after yesterday was Monday, then tomorrow will be -----.

- (A)Thursday (B)Friday (C)Saturday (D)Wednesday

3). Study the information carefully to answer the questions. Which point is North-West of A?



- A) D B)E C)F D)I

 Space for rough work.

4). How many possible combinations of 1 cup and 1 plate can be formed from the given cups and plates.



- (A)12 (B)10 (C)24 (D)4

5). If Riya takes a leave on 22nd January and comes only on odd number of days in January 2024, then how many days does she not work? (Assume that every Sunday is a holiday.)

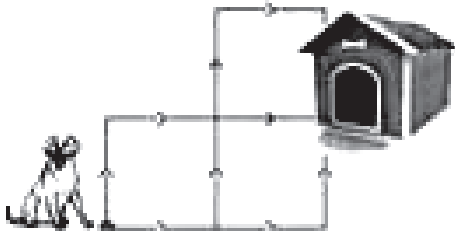
JANUARY 2024

SUN	MON	TUE	WED	THU	FRI	SAT
31	1	2	3	4	5	6
7	8	9	10	11	12	13
14	15	16	17	18	19	20
21	22	23	24	25	26	27
28	29	30	31	1	2	3

- (A)16 (B)17 (C)18 (D)19

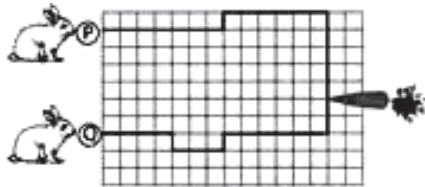
 Space for rough work.

6). How many different ways are there for the dog to reach its kennel?



- A) 4 B) 5 C) 6 D) 3

7). Which rabbit P or Q will reach the carrot first if $1 \text{ unit} = 1$ units?



- A) P B) Q
 C) Both p and Q reach at the same time D) can't be determined

8). If today is Wednesday and Soham's birthday is on the 3rd day after today, then on which day she will celebrate her birthday?

- A) Saturday B) Sunday C) Monday D) Friday

9). Find the next letter in the series given below.



- A) O B) P C) Q D) R

 Space for rough work.

10). Choose the correct combination of numbers, so that letters when arranged formed a meaningful word.



- A) 5, 2, 3, 4, 1 B) 5, 1, 2, 3, 4
 C) 3, 4, 2, 1, 5 D) 5, 3, 2, 4, 1

11). If $\triangle = M$, $\square = R$, $\parallel = O$ and $\text{circle with slash} = K$, then what is the code for the given figures?



- A) M R O K B) M O R K C) M K R O D) R O K M

12). Which letter / number / symbol will be 4th from the right of "&".

2?3#8\$^428J&5*%7=+@

- (A)4 (B)7 (C)= (D)%

13). Which letter will continue the given series.











- (A) (B) (C) (D)

Space for rough work.

14). From the given alternatives select the word which can be formed using the letters of the given word.



- A) Caption B) Rotation
 C) Option D) Nation

15). If the  is called ,  is called .  is called  and  is called , then what is the shape of "INDIAN FLAG"?

- (A)  (B)  (C)  (D) 

16). Study the table and answer the following question.

Letters	A	B	C	D	E	F	G	H	I	J	K	L	M	N
Codes	2	m	x	q	9	e	f	o	d	1	6	r	4	t

Find the code for "CHALK".

- A) xo24t B) 4t2r6
 C) xo2r6 D) xord6

17). Find the missing number, if same rule is followed row-wise or column-wise.

15	29	14
13	25	12
28	?	26

- (A)55 (B)54 (C)56 (D)45

 Space for rough work.

18). Identify the category of the word formed after arranging the given letters.



- A) Vegetable B) Fruit
 C) Month D) Flower

19). What comes next in the pattern?



- A) B) C) D)

20). How many possible combinations of 1 book and 1 pen can be formed from the 7 books and 5 pens.

- (A)12 (B)7 (C)5 (D)35

21). Find odd one out?



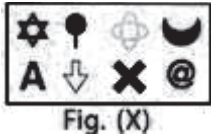
22). Identify the relation between the given pair on either side of :: and find the missing figure.



- A) B) C) D) all of these

Space for rough work.

23). Select a figure from the options which is same as the Fig(X).



A)



B)





C)



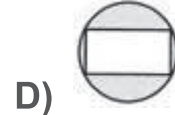
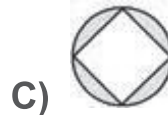
D)



24). Choose the monkey that does not belong to the group.



25). Find odd one out?



26). Identify the relation between the given pair on either side of :: and find the missing figure.

E : 5 :: D : ?

A) 1

B) 2

C) 3

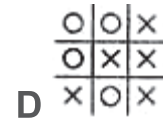
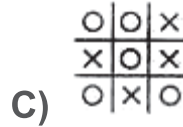
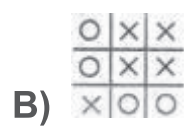
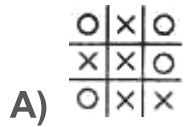
D) 4

Space for rough work.

27). Choose the figure which is similar to figure (X).



Figure (X)



28). How many groups of 3 boys can be formed from the children given below?



A) 2

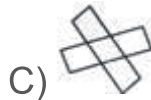
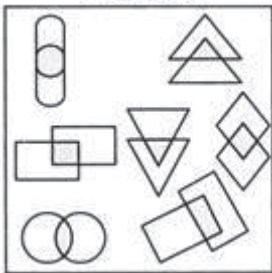
B) 6

C) 4

D) 3

29). Which of the following figures belongs to groups (X)?


Group (X)



D) None of these

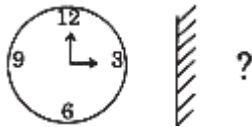
Space for rough work.

30) Find the mirror image of the given word.



- A) **PNOD** B) **DNOP** C) **OPND** D) **DNPO**

31). Which of the following is the mirror image of the figure shown here?



- A) B) C) D)

32). Find the figure from the options which is embedded in figure (X).

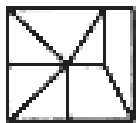


Figure (X)

- A) B) C) D)

33). Find out the figure from the options that contains figure as its part.



Figure (A)

- A) B) C) D)


 Space for rough work.

34). Which of the following words is not embedded in the Figure (X)?



- A) ON B) TO C) QO D) OK

35) How many triangles are there in the given figure?

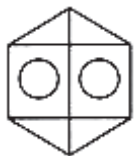


- A) 4 B) 9
 C) 7 D) 8

36). I have 6 square faces. Who am I?

- A) B) C) D)

37). There are four different kinds of shape given in the above picture. Which shape is the maximum?



- A) Triangle B) Rectangle
 C) Hexagon D) Circle

38). Which of the following is different from the other three?

- A) B) C) D)

Space for rough work.

39). Given below sets of numbers followed by four options with its mirror images. Pick are the correct image.



- A) B) C) D)

40). Find the figure from the options which is hidden/ embedded in figure (X).

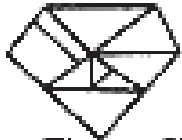


Figure (X)

- A) B) C) D)

41). Seven girls met and they greeted each other with a 'Hello'. How many times was the word 'Hello' said?



- A) 16 B) 14 C) 21 D) 20

42). If white is called blue, blue is called red, red is called yellow, yellow is called green, green is called black, black is called violet and violet is called orange, what would be the colour of human blood?

- A) Red B) Green C) Yellow D) Violet

 Space for rough work.

43) Four people are sitting in a row facing toward south direction. B is sitting 2nd to the right of C. A is sitting between B and C. What is the position of D?

- A) 4th to the right of B B) 3rd to the left of B
 C) 3rd to the right of C D) either (B) or (C) is possible.

44). Direction: If N, E, S, W represent the compass directions of North, East, South and West, and dots represent the number of steps, give the codes for each of these paths. What is the code for figure below?



- A) S1E4S1E1 B) N1E3S1E1
 C) N2E4S1E1 D) E1S1E4N1

45). What comes next in the sequence?

ADG, HKN, ORU,

- A) VYB B) VWY C) WYZ D) WZB

46). Which of the following belongs to groups (X)?



- A) **J** B) **C** C) **K** D) **A**

 Space for rough work.

47). How many mangoes are left after making groups of 3 mangoes each?



- A) 4 B) 2 C) 3 D) 0

48). Select the mirror image of the given word.

UNDERSTAND



?

- A) UNDERSTAND
 B) DNSTAREDN
 C) DSNARETSU
 D) DNEARTSUA

 Space for rough work.

49). Match the following parts with the figures, so that it completes the larger square.

1.		a.	
2.		b.	
3.		c.	
4.		d.	
5.		e.	
6.		f.	

A) 1 → a, 2 → b, 3 → c, 4 → d, 5 → e, 6 → f

B) 1 → b, 2 → c, 3 → e, 4 → f, 5 → a, 6 → d

C) 1 → c, 2 → a, 3 → f, 4 → e, 5 → b, 6 → d

D) 1 → c, 2 → a, 3 → e, 4 → f, 5 → b, 6 → d

 Space for rough work.

50). How many curves and straight lines are there in the diagram given below?



A) 9, 7

B) 8, 12

C) 9, 16

D) 20, 22

Space for rough work.



Ganga Education Society's

SHRADDHA OLYMPIAD QUEST

In pursuit of excellence...

CLASS

3

DO NOT OPEN THIS BOOKLET UNTIL ASKED TO DO SO

Total Questions : 50 ■ Time : 1 hr.

Name :

SOQ Roll No. : Contact No.:

Guidelines for the Candidate

1. You will get additional 10 minutes to fill up information about yourself on the OMR sheet before the start of the exam.
2. Write your **Name, Class & Roll Number** clearly on the **OMR sheet** and do not forget to sign it. We will share your marks / result and other information related to SOQ exams on your mobile number.
3. The question paper comprises three sections:
Section - 1 : Grammar & Vocabulary (20 Q.) **Section - 2** : Comprehension (20 Q.) **Section 3** : Achiever's Section (10 Q.)
4. All questions are compulsory. There is no negative marking. Use of calculator is not permitted.
5. There is only ONE correct answer. Choose only one option for an answer.
6. To mark your choice of answer by darkening the circle on the OMR sheet, use **black ball point pen** only.

E.g.

Q.16. In the water cycle condensation is the process of

- A. Water vapour cooling down and turning into liquid B. Ice warming up and turning into a liquid
C. Liquid cooling down and turning into ice D. Liquid warming up and turning into water vapour

As the correct answer is option A, you must darken the circle corresponding to option A on the OMR sheet as shown in the figure

16. ● ○ ○ ○

7. Rough work should be done in the blank space provided in the booklet
8. Return the OMR sheet to the invigilator at the end of the exam.

SECTION - I - GRAMMAR AND VOCABULARY

[Directions (For Q.1 to Q.09): Read the Questions carefully and choose the most appropriate options to fill in the blanks.]

1. 'Silly' means the same as _____.

- (A) Wise (B) Foolish
(C) Brilliant (D) Clever

2. Use the correct body part to complete the following expression. '_____ of the **bottle**.'

- (A) head (B) foot
(C) neck (D) hand

3. Insert the correct letter to complete the given word: '**for__ign**.'

- (A) [e] (B) [a]
(C) [r] (D) [i]

4. One '**mouse**' in my room and many _____ on my yard.

- (A) myce (B) mouses
(C) mice (D) mouse

5. One **sheep** is on the ground and many _____ are on the field.

- (A) Sheep (B) Sheeps
(C) flock (D) All of these

6. Choose the proper adjective to fill in the blank and complete the sentence. '**Oh! This tea is too**_____.'

- (A) heavy (B) sticky
(C) hot (D) soft

7. Choose the appropriate preposition to fill in the blanks and complete the sentence. 'Alvin is a good singer. _____, he is a great artist.'

- (A) aside (B) besides
(C) beside (D) along

8. Add appropriate question tag. 'Reeta will play well, _____?'

- (A) won't she (B) did she
(C) could she (D) will she

9. Add appropriate question tag. 'Let's write the examination, _____?'

- (A) are we (B) could we
(C) let we (D) shall we

[Directions (For Q. 10 to Q. 20): Read the Questions carefully and choose the most suitable answer from the given options.]

10. Choose the correct word that is formed from the given jumbled word. 'oabt'.

- (A) Bato (B) Toba
(C) Boat (D) Obat

11. Choose the correct synonym of the given word; 'Friend'.

- (A) Colleague (B) Pal
(C) Classmate (D) None of these

12. Choose the correct synonym of the given word; 'Angry'

- (A) Sad (B) Annoyed
(C) Destroyed (D) Both (B) and (A)

13. Choose the correct antonym of the given word; 'Coward'

- (A) Foolish (B) Enemy
(C) Brave (D) None of these

14. Choose the correct antonym of the given word; **'Serious'**.

- (A) Malacious (B) Feary
(C) Barbarious (D) Hilarious

15. Choose the correct feminine gender of **'Lord'**.

- (A) Lady (B) Woman
(C) Gentlewoman (D) All of these

16. Choose the correct feminine gender of **'Nephew'**.

- (A) Nice (B) Neece
(C) Niece (D) Niese

17. Choose the **past tense** form of the action word (verb) you see in the given picture.

- (A) danced (B) dancing
(C) have dances (D) to dance



18. Choose the **future tense** form of the action word (verb) you see in the given picture.

- (A) sing (B) will sing
(C) sang (D) singing



19. Name the Interjection in the given sentence. **'Hurrah! I am the winner of this season.'**

- (A) Season (B) Winner
(C) Hurrah (D) am

20. Choose the correct proverb.

- (A) Sword is mightier than pen.
- (B) Pen is mighty and sword is mighty.
- (C) Pen and Sword are mighty.
- (D) Pen is mightier than sword.

SECTION - II - COMPREHENSION

[Directions (For Q.21 to Q.25): Read the given passage carefully and choose the most appropriate answers for each from the given options.]

Max reads more than anyone he knows. He loves to read during all of his free time. His friends tease him because he would rather read than play video games, but his parents and his teachers are proud of him. They say reading is important, and it will help him learn about the world around him. They also tell him it is a good habit to read on a regular basis.

21. What do Max like the most?

- (A) Playing
- (B) Speaking
- (C) Reading
- (D) Listening

22. 'Max reads more than anyone he knows.' (What part of speech is the underlined word?)

- (A) Conjunction
- (B) Preposition
- (C) Noun
- (D) Pronoun

23. Choose the correct meaning of the word '**tease**' from the following:

- (A) to make fun of others
- (B) to encourage others
- (C) to help others
- (D) to play trick on others

24. Max's Parents and teachers were _____ about him.

- (A) sad
- (B) happy
- (C) proud
- (D) worried

25. Reading is important because, _____

- (A) it helps to play with others (B) it creates a good personality
(C) it helps to improve our language (D) it helps to learn about the world around

[Directions (For Q.26 to Q.30): Read the given poem carefully and choose the most appropriate answers for each from the given options.]

Rabbit Habit

I have a rabbit habit
I like to crunch and chew
On celery logs and carrot sticks,
And apple Wedges, too.
I have a rabbit habit
I like to chomp and munch
On crispy greens and juicy grapes.
Mmm... rabbit food for lunch!

- Liana Mahoney

26. What does the poet talk about in the poem?

- (A) About a habit (B) About a rabbit
(C) About a carrot (D) About an animal

27. Poet likes to _____, _____ and _____

- (A) chomp, chew, drink (B) crunch, much, chomp
(C) eat, drink, play (D) Crunch, much, drink

28. 'On crispy greens and juicy grapes' – How many adjectives are there in the sentence given?

- (A) one (B) No adjectives
(C) three (D) two

29. 'I like to chomp and munch.' - Name the tense of the given sentence.

- (A) Present Tense (B) Past Tense
(C) Future Tense (D) Simple Tense

30. Find the odd one out from the following: 'celery logs, carrot sticks, apple wedges, glass of milk'

- (A) Apple wedge (B) Carrot sticks
(C) Celery logs (D) Glass of milk

[Directions (For Q.31 to Q.35): Read the given passage carefully and choose the most appropriate answers for each from the given options.]

A music concert has many instruments, which are played by many musicians. 'Musicians' is the word you use for people who play music with instruments. If you play the piano, you are a 'pianist'. A 'drummer' plays the drum. There are many kinds of drums. When a song is liked by others, it is played again. This means the song is 'replayed'. The 'guitarist' plays the guitar and flute is played by the 'flutist'. The large group of different instruments is called an 'orchestra'.

31. Group of different musical instruments is called as an _____

- (A) musicians (B) symphony
(C) drummers (D) orchestra

32. Pick out the odd man out from the given group. 'Piano, Guitar, Flute, Song'

- (A) song (B) guitar
(C) flute (D) piano

33. There are many kinds of drums. – Name the part of speech of the underlined word:

- (A) Pronoun (B) Verb
(C) Preposition (D) Adjective

34. What is meant by the word 'replay'?

- (A) Playing along with a music
(B) Playing and listening the song
(C) Playing the music again and again
(D) None of these

35. Who are musicians?

- (A) People who play the piano.
(B) People who play music with instruments.
(C) People who play the drummer.
(D) People who play guitar

[Directions (For Q.36 to Q.40): Read the given passage carefully and choose the most appropriate answers for each from the given options.]

Bees live in a house that is called a hive. There are three kinds of bees: workers, drones, and queens. Only one queen bee can live in each hive. If she is lost or dead, the other bees will stop their work. Bees are very wise and busy little creatures. They all join together to build cells of wax for their honey. Each bee takes its proper place and does its own work. Some go out and gather honey from the flowers; others stay at home and work inside the hive. The cells which they build are all of one shape and size, and no room is left between them. The cells are not round. They have six sides. It is pleasant to see how busy they always are. But the drones do not work. Before winter comes, all the drones are driven from the hive so that they don't eat the honey which they did not gather. It is not safe for children to handle bees. Bees have a painful sting that they use in their defense.

36. Which are the three kinds of bees?
- (A) King, Queen, Drones
(B) King, Queen, Workers
(C) Queen, Workers, Drones
(D) King, Workers, Drones
37. How many sides does a cell in the hive have?
- (A) One (B) Five
(C) Six (D) Four
38. Which will be the most suitable word to describe the bees?
- (A) Hard-worker (B) Lazy
(C) Cute (D) Funny
39. What is meant by the word '**defense**'?
- (A) To work very hard
(B) To protest against an attack.
(C) To Fly from one place to another
(D) To make the something with wax
40. Name a season described in the passage.
- (A) Summer (B) Rainy
(C) Winter (D) All of theses

SECTION - III - ACHIEVER'S

[Directions (For Q.41 to Q.44): Read the given questions carefully and choose the most appropriate answers for each from the given options.]

41. I get an injury on my left _____ an now on both my _____ are
paining so much.

(A) foot, foots

(B) foot, feet

(C) feet, foot

(D) feet and feets

42. Unscramble the words and choose the correct option. '**do/ how/ you/do/today**'

(A) Do how you do today? (B) How you do do today?

(C) How do you do today? (D) Today you do how do?

43. Find the correct spelling of the word that means '**of very large or huge**'.

(A) Giggantic

(B) Gigantic

(C) Jijantic

(D) Gijantic

44. Which is the correct word that is used for the feminine name of '**Duke**'?

(A) Duchess

(B) Dutchess

(C) Dutcchess

(D) Doches

[Directions (For Q.45 to Q.46): Read the conversations carefully and choose the most appropriate answers for each from the given options.]

45. Soham: Hi Ravi, do you have change for rupees 500?

Ravi: _____

(A) Take it!

(B) Mind your business

(C) Sure, here you go.

(D) Go away! I don't have.

46. Mother: "Bobby, You are eating like a bird." (What is the meaning of the underlined phrase?)

- (A) Eating slowly (B) Eating fast
(C) Eating less (D) Eating more

[Directions (For Q.47 to Q.48): Choose the correct spelling.]

47. A traditional type of pasta round in section.

- (A) Vermicelli (B) Vermicelly
(C) Vermecelly (D) Vermecelli

48. A person who designs, builds, or maintains engines, machines, or structures.

- (A) Engenear (B) Engineer
(C) Engineer (D) Engeeneer

[Directions (For Q.49): Choose the correct proverb that gives us the following meaning.]

49. We need to be very cautious in doing something.

- (A) Look before you leap.
(B) Actions speak louder than words.
(C) Learn to walk before you can run.
(D) Practice makes man perfect.

[Directions (For Q.50): Choose the correct preposition to fill the blanks.]

50. There is a wall _____ the ground.

- (A) above (B) after
(C) around (D) along

Space for rough work.



SHRADDHA OLYMPIAD QUEST

MATHS

For Std. 3, 4, 5, 6, 7, 8, 9



SHRADDHA OLYMPIAD QUEST

SCIENCE

For Std. 3, 4, 5, 6, 7, 8, 9



SHRADDHA OLYMPIAD QUEST

ENGLISH

For Std. 3, 4, 5, 6, 7, 8, 9



SHRADDHA OLYMPIAD QUEST

MAT

For Std. 3, 4, 5, 6, 7, 8, 9



Ganga Education Society's

**SHRADDHA
OLYMPIAD QUEST**

In pursuit of excellence...

Near Jaydatt Tuffen Glass, Solage Mala, Ichalkaranji - 416115. ☎ 7970062700, 8070026700
www.shraddhaolympiadquest.com